

Fraction in a group

Name _____

Date _____


1. What fraction is represented by blue circles ?




2. What fraction is represented by red circles ?



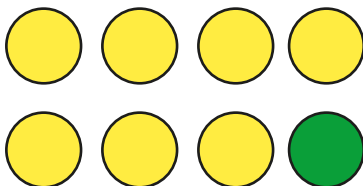
3. What fraction is represented by yellow circles ?



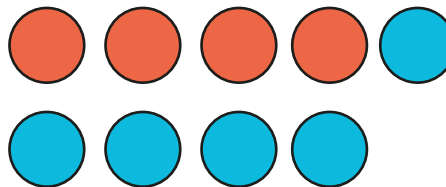
4. What fraction is represented by black circles ?




5. What fraction is represented by green circles ?



6. What fraction is represented by red circles ?



7. What fraction is represented by blue circles ?



8. What fraction is represented by orange circles ?

