

How do we make 3 ?

$$2 + 2 =$$

$$2 - 0 =$$

$$6 - 3 =$$

How do we make 2 ?

$$2 + 4 =$$

$$7 - 5 =$$

$$6 + 3 =$$

How do we make 4 ?

$$7 + 2 =$$

$$2 - 0 =$$

$$9 - 5 =$$

How do we make 1 ?

$$1 + 2 =$$

$$2 - 0 =$$

$$5 - 4 =$$

How do we make 5 ?

$$6 + 2 =$$

$$10 - 5 =$$

$$9 - 5 =$$

How do we make 6 ?

$$5 + 1 =$$

$$9 - 5 =$$

$$9 - 4 =$$

How do we make 7 ?

$$5 + 1 =$$

$$9 - 2 =$$

$$9 + 4 =$$


How do we make 8 ?

$$4 + 4 =$$


$$3 - 2 =$$

$$7 + 4 =$$


What shape is this ?



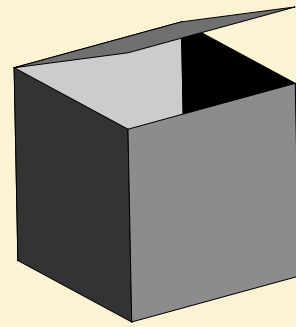
What shape is this ?




What shape is this ?




What shape is this ?




What shape is this ?




What shape is this ?




What shape is this ?




What shape is this ?




What time is it ?




What time is it ?




What time is it ?




What time is it ?




What time is it ?




What time is it ?



What time is it ?



What time is it ?



**There are 5 red pens Paul's bag.  
There are also 2 blue ones.  
How many pencils are there in all ?**

**There were 3 fish in a tank. 2 more  
fish were added. How many were  
there altogether ?**

**2 boys live in a house. 3 other boys  
come to live with them. How many  
boys live in the house ?**

**A bird's nest contains 3 eggs. It lays  
4 more eggs. How many eggs are  
there in all ?**

**Mary has 3 apples. Her mum gave  
her 2 more apples. How many does  
she have in all ?**

**Linda has 7 stamps in her collection.  
She adds 4 more stamps. How many  
stamps does she have in all ?**

**There were 6 benches at a park. 5  
more benches were added. How  
many benches were there in all ?**

**Jones had \$12 in his wallet. He  
spent \$ 7 at a shop. How much  
money does he have left ?**