

# ADDITION EXERCISES


Name : ..... Class : .....

Score : .....

Match the figures with the correct answers; use a ruler to draw an arrow pointing to the corresponding answer

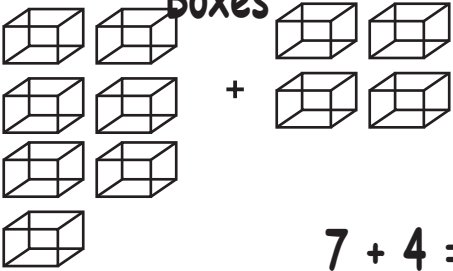
## Questions

Fish

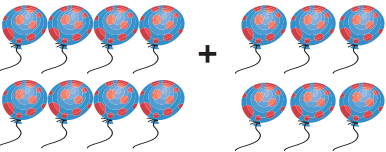


$2 + 3 =$

Boxes




$7 + 4 =$



Balloons

$8 + 6 =$

Stars



$6 + 4 =$

10
14
5
11

Remarks

\_\_\_\_\_  
\_\_\_\_\_  
\_\_\_\_\_

Total

\_\_\_\_\_