


Name : ..... Class : .....

# Estimating

Estimate the number of items in the boxes to the nearest ten.


1.)



About 30

About 50


2.)



About 20

About 40

3.)



About 20

About 30

Name : ..... Class : .....

## Estimating

### Answers

Estimate the number of items in the boxes to the nearest ten.

1.) About 30

About 50

2.) About 20

About 40

3.) About 20

About 30