




Name : Class :

Fractions

Which expression suits the following divisions ?

Tick the correct answer

	$1/2 = \text{half}$ <input type="checkbox"/>
	$1/3 = \text{one third}$ <input type="checkbox"/>
	$1/4 = \text{one quarter}$ <input type="checkbox"/>
	$1/2 = \text{half}$ <input type="checkbox"/>
	$1/3 = \text{one third}$ <input type="checkbox"/>
	$1/4 = \text{one quarter}$ <input type="checkbox"/>
	$1/2 = \text{half}$ <input type="checkbox"/>
	$1/3 = \text{one third}$ <input type="checkbox"/>
	$1/4 = \text{one quarter}$ <input type="checkbox"/>