



Fractions

Fraction of objects



What fraction is represented by the blue teddy bears ?

.....




What fraction is represented by the yellow balls ?

.....



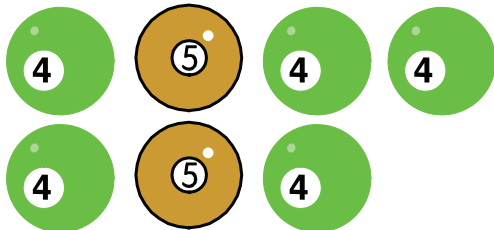
What fraction is represented by the black balls ?

.....



What fraction is represented by the blue balls ?

.....



What fraction is represented by the green balls ?

.....