

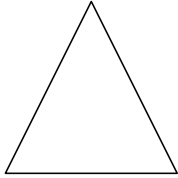
Name: \_\_\_\_\_

Date: \_\_\_\_\_

# Geometry

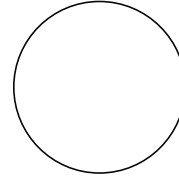
Identify each shape by marking the name that best describes it:

1)




- A. Rectangle
- B. Triangle
- C. Rhombus
- D. Ellipse

2)



- A. Circle
- B. Ellipse
- C. Square
- D. Rectangle

3)



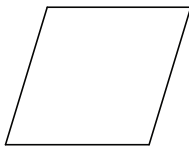
- A. Square
- B. Rhombus
- C. Ellipse
- D. Triangle

4)



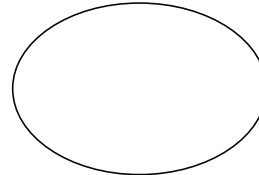
- A. Triangle
- B. Rectangle
- C. Rhombus
- D. Circle

5)



- A. Rhombus
- B. Rectangle
- C. Square
- D. Ellipse

6)




- A. Rectangle
- B. Ellipse
- C. Circle
- D. Triangle

7)



- A. Rectangle
- B. Square
- C. Ellipse
- D. Rhombus

8)



- A. Square
- B. Rectangle
- C. Circle
- D. Rhombus

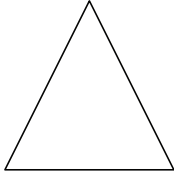
Name: \_\_\_\_\_

Date: \_\_\_\_\_

# Geometry


Identify each shape by marking the name that best describes it:

1)



- A. Rectangle      C. Rhombus  
 B. Triangle      D. Ellipse

2)




- A. Circle      C. Square  
B. Ellipse      D. Rectangle

3)



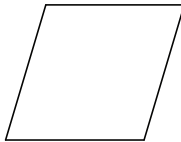
- A. Square      C. Ellipse  
B. Rhombus      D. Triangle

4)



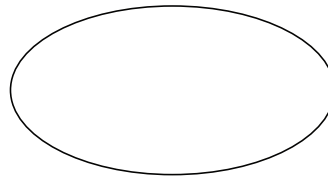
- A. Triangle      C. Rhombus  
 B. Rectangle      D. Circle

5)



- A. Rhombus      C. Square  
B. Rectangle      D. Ellipse

6)




- A. Rectangle      C. Circle  
 B. Ellipse      D. Triangle

7)



- A. Rectangle      C. Ellipse  
B. Square      D. Rhombus

8)



- A. Square      C. Circle  
B. Rectangle      D. Rhombus