

Name : \_\_\_\_\_

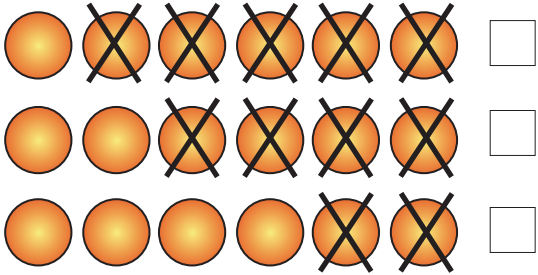
Class : \_\_\_\_\_

# Subtraction

Solve the problem and tick the picture that represents it

1.

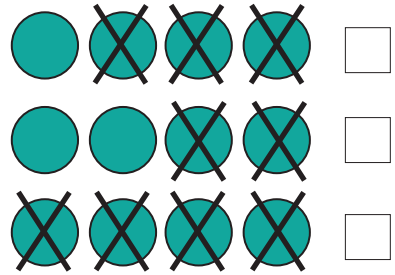
$$6 - 4 =$$






2.

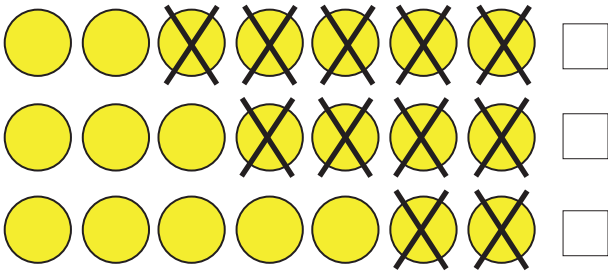
$$4 - 4 =$$






3.

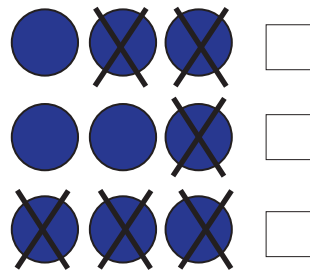
$$7 - 5 =$$






4.

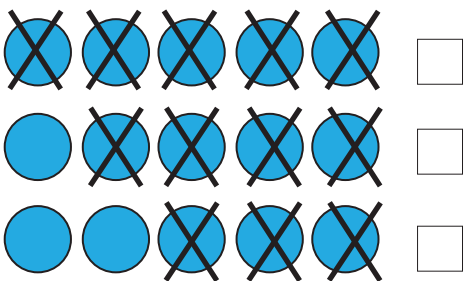
$$3 - 1 =$$






5.

$$5 - 3 =$$






6.

$$8 - 2 =$$

