

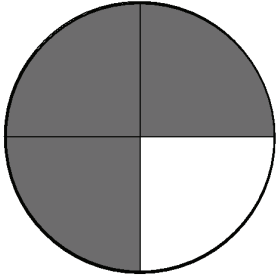
Name: _____

Date: _____

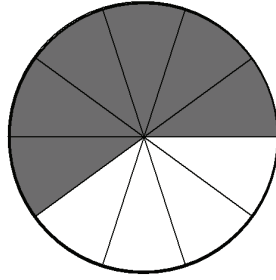
Fractions

Write the fraction of the shape that is shaded:

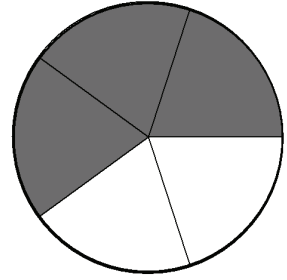
1)



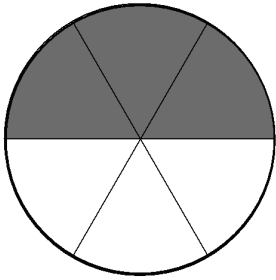
2)



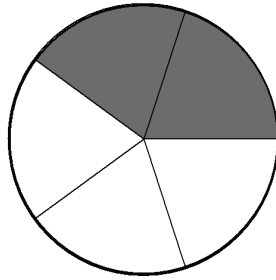
3)



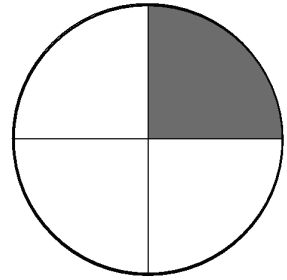
4)



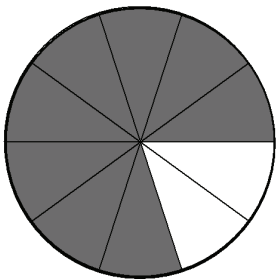
5)



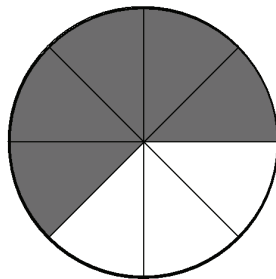
6)



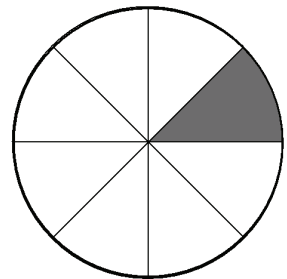
7)



8)



9)



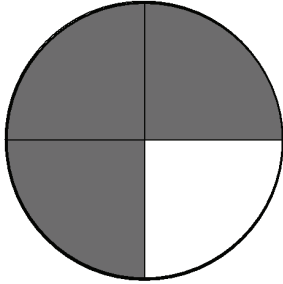
Name: _____

Date: _____

Fractions

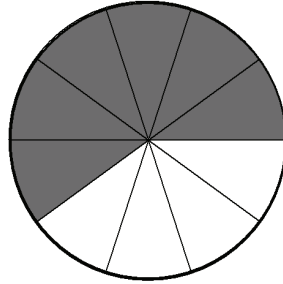
Write the fraction of the shape that is shaded:

1)



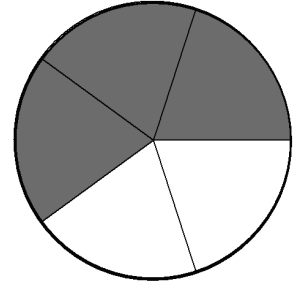
_____ $\frac{3}{4}$ _____

2)



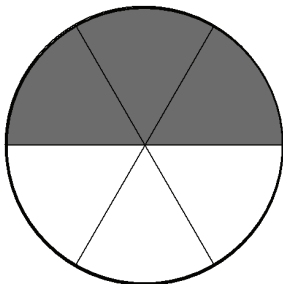
_____ $\frac{6}{10}$ _____

3)



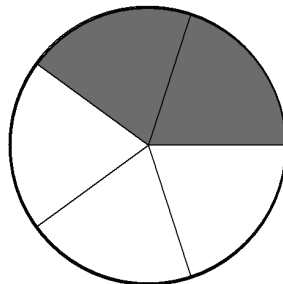
_____ $\frac{3}{5}$ _____

4)



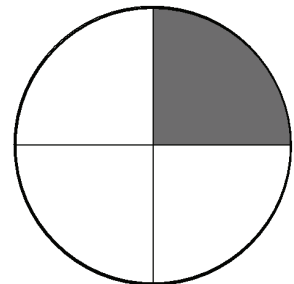
_____ $\frac{3}{6}$ _____

5)



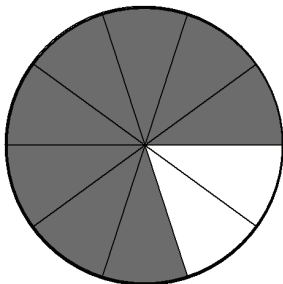
_____ $\frac{2}{5}$ _____

6)



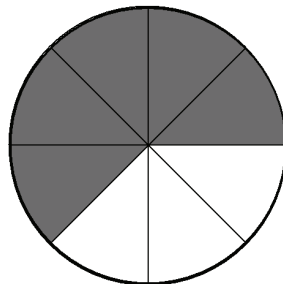
_____ $\frac{1}{4}$ _____

7)



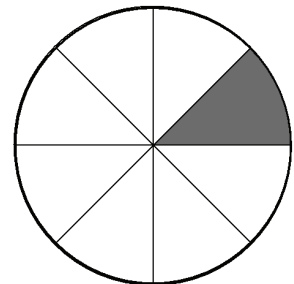
_____ $\frac{8}{10}$ _____

8)



_____ $\frac{5}{8}$ _____

9)



_____ $\frac{1}{8}$ _____