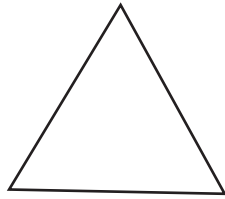


Geometry

Symmetry

Which objects are symmetrical ? Trace the line of symmetry.

1)



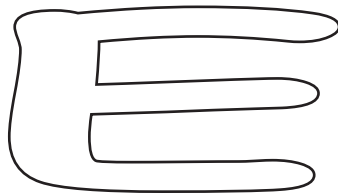
2)




3)



4)



5)

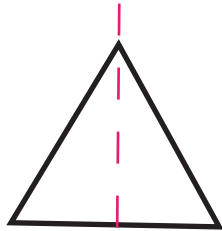


Geometry

Answers

Which objects are symmetrical ? Trace a line of symmetry.

1)



2)



3)



4)



5)

