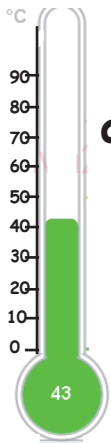


Name : ..... Class : .....

# Measurements


1) What temperature reading can you see on the thermometers ?



a .....




b .....



c .....

2)



What is the length of the Knife ?

Tape .....

3)




What is the speed ?

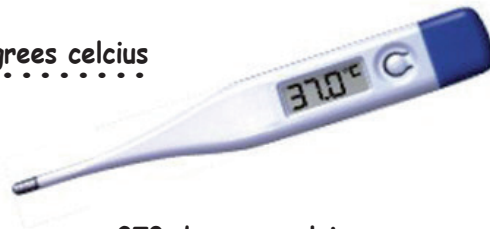
Speedometer .....

# Answers

1) What temperature reading can you see on the thermometers ?



a 40 degrees celcius




b 370 degrees celcius



c 33 degrees celcius

2)



What is the length of the knife ?

Tape ..... 3 cm..

3)



What is the speed ?

Speedometer ..... 190 Kilometers per hour