


Name: \_\_\_\_\_

Class: \_\_\_\_\_

# Money

Add the coins.

1.  = \_\_\_\_\_

2.  = \_\_\_\_\_

3.  = \_\_\_\_\_

4.  = \_\_\_\_\_

5.  = \_\_\_\_\_

6.  = \_\_\_\_\_

Name: \_\_\_\_\_

Class: \_\_\_\_\_


# Money


Add the coins.

1.  = \$0.32 \_\_\_\_\_

2.  = \$0.36 \_\_\_\_\_

3.  = \$0.62 \_\_\_\_\_

4.  = \$0.61 \_\_\_\_\_

5.  = \$0.85 \_\_\_\_\_

6.  = \$1.25 \_\_\_\_\_