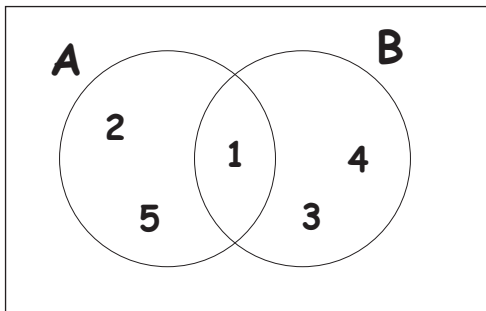


Name : Class :

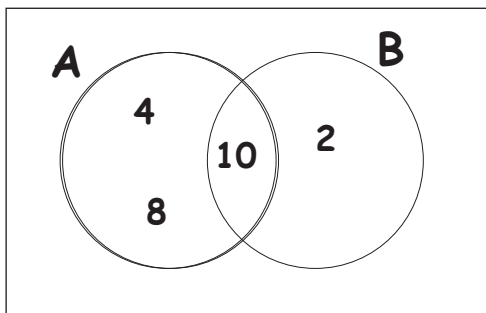
Venn diagrams

1.



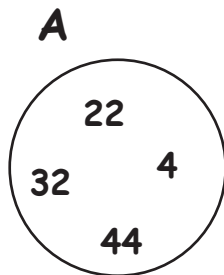
What is $A \cap B$?

2.



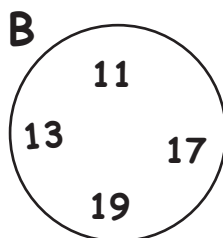
What is $A \cup B$?

3.



What elements are in the set A ?

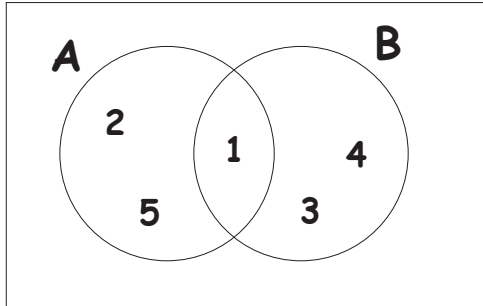
4.



What elements are in the set B ?

Answers

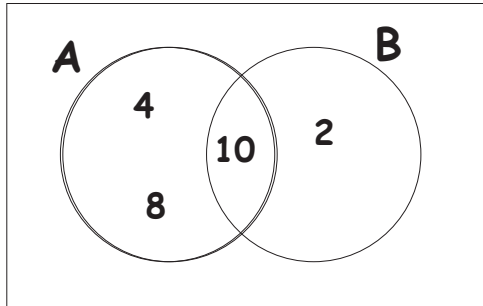
1.



What is $A \cap B$?

{1}

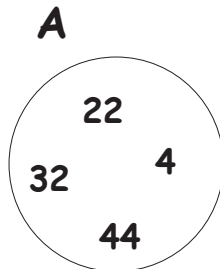
2.



What is $A \cup B$?

{2, 4, 6, 8}

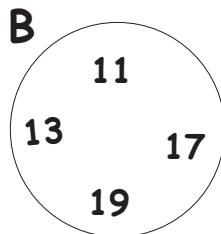
3.



What elements are in the set A ?

{4, 22, 32, 44}

4.



What elements are in the set B ?

{11, 13, 17, 19}