

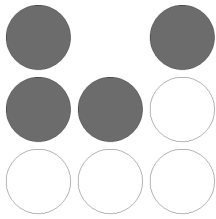
Name: _____

Date: _____

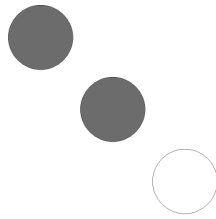
Fractions

Write the fraction of the set that is shaded:

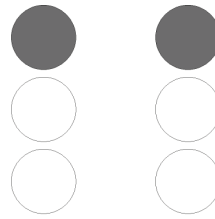
1)



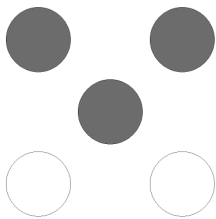
2)



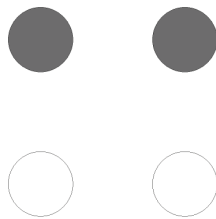
3)




4)



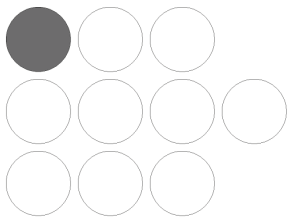
5)




6)



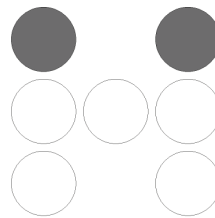
7)



8)



9)




Name: _____

Date: _____

Fractions

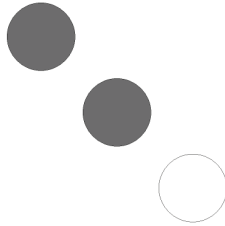
Write the fraction of the set that is shaded:

1)



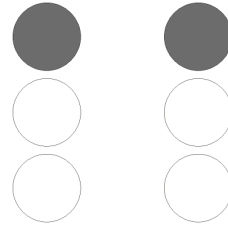
 $\frac{4}{8}$

2)




 $\frac{2}{3}$

3)



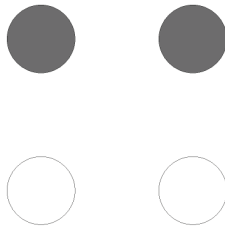
 $\frac{2}{6}$

4)




 $\frac{3}{5}$

5)




 $\frac{2}{4}$

6)




 $\frac{1}{9}$

7)



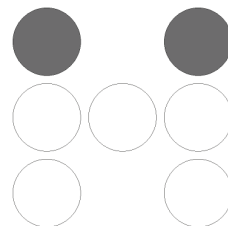
 $\frac{1}{10}$

8)



 $\frac{1}{3}$

9)



 $\frac{2}{7}$