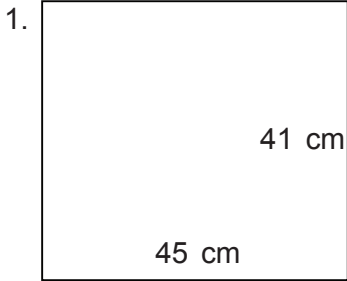


Name: \_\_\_\_\_

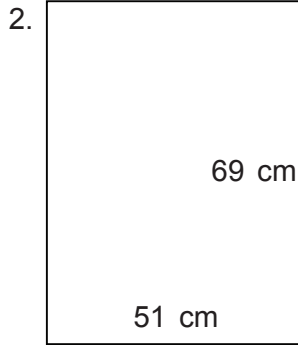
Class: \_\_\_\_\_

## Rectangle - Perimeter & Area

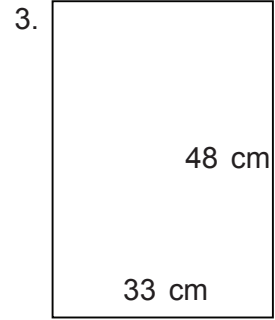
Find the perimeter and area.



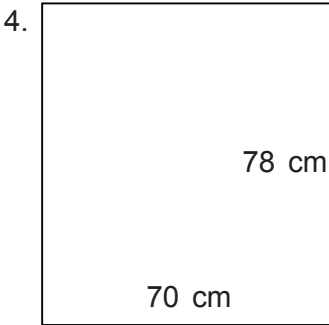
\_\_\_\_\_



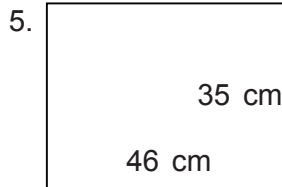
\_\_\_\_\_



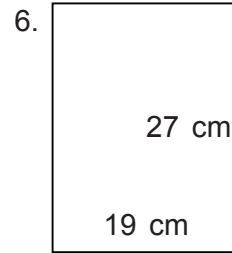
\_\_\_\_\_



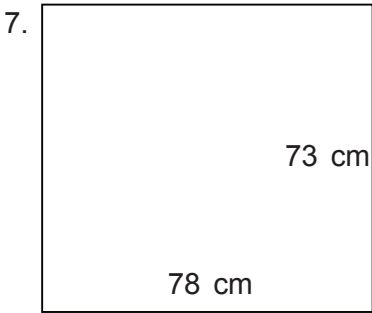
\_\_\_\_\_



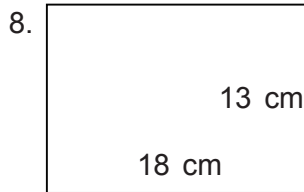
\_\_\_\_\_



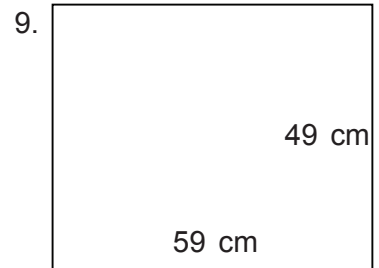
\_\_\_\_\_



\_\_\_\_\_



\_\_\_\_\_



\_\_\_\_\_

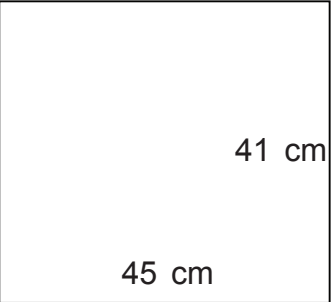
\_\_\_\_\_

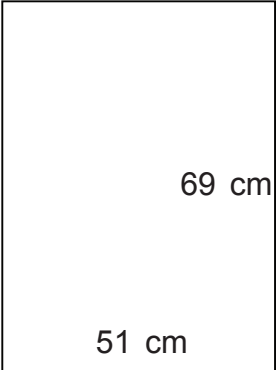
Name: \_\_\_\_\_

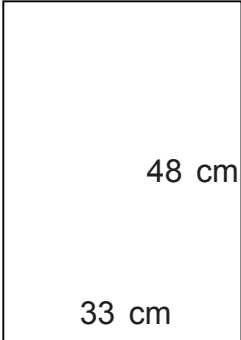
Class: \_\_\_\_\_

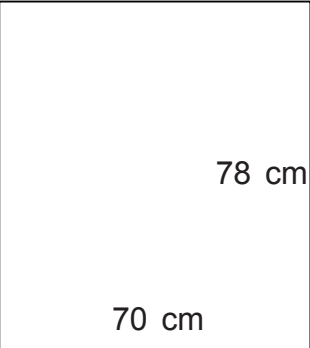
## Rectangle - Perimeter & Area

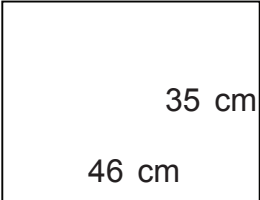
Find the perimeter and area.

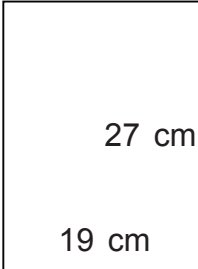
1.   
 $P = 172 \text{ cm}$   $A = 1,845 \text{ cm}^2$

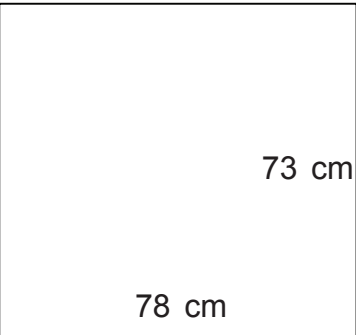
2.   
 $P = 240 \text{ cm}$   $A = 3,519 \text{ cm}^2$

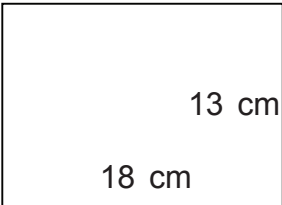
3.   
 $P = 162 \text{ cm}$   $A = 1,584 \text{ cm}^2$

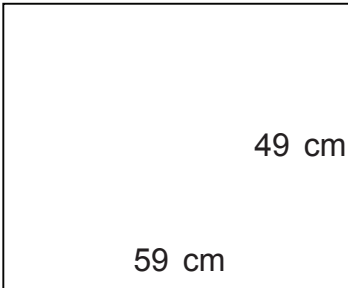
4.   
 $P = 296 \text{ cm}$   $A = 5,460 \text{ cm}^2$

5.   
 $P = 162 \text{ cm}$   $A = 1,610 \text{ cm}^2$

6.   
 $P = 92 \text{ cm}$   $A = 513 \text{ cm}^2$

7.   
 $P = 302 \text{ cm}$   $A = 5,694 \text{ cm}^2$

8.   
 $P = 62 \text{ cm}$   $A = 234 \text{ cm}^2$

9.   
 $P = 216 \text{ cm}$   $A = 2,891 \text{ cm}^2$