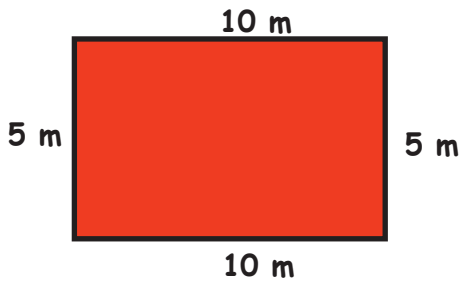


Geometry

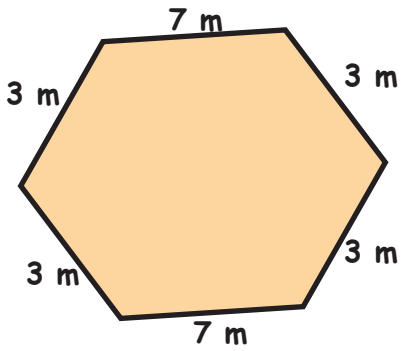
Name : Class :

Perimeter

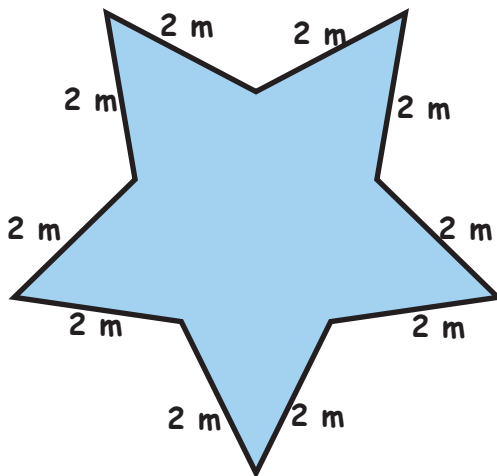
1)



2)



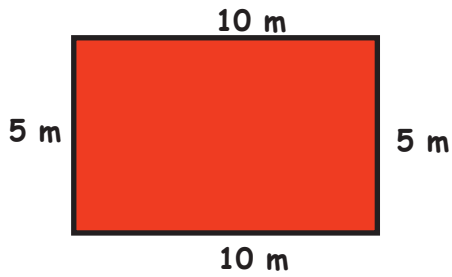
3)



Answers

Perimeter

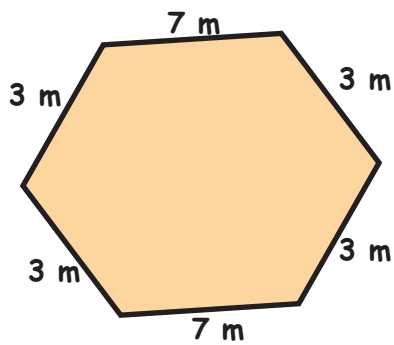
1)



$$10\text{m} + 5\text{m} + 10\text{m} + 5\text{m} =$$

30 m

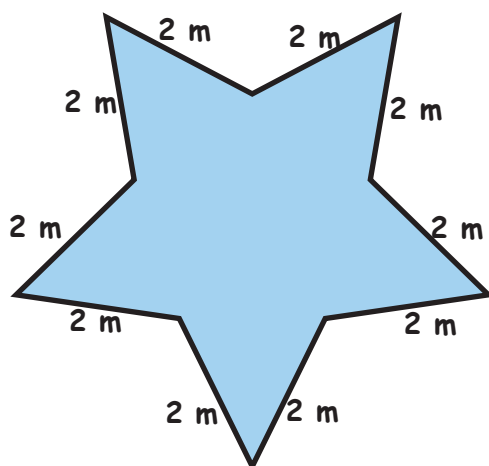
2)



$$7\text{m} + 3\text{m} + 3\text{m} + 7\text{m} + 3\text{m} + 3\text{m} =$$

26 m

3)



$$2\text{m} + 2\text{m} + 2\text{m} + 2\text{m} + 2\text{m} + 2\text{m} + 2\text{m} + 2\text{m} + 2\text{m} + 2\text{m} =$$

20 m