

Name: \_\_\_\_\_

Class: \_\_\_\_\_

# Money

Add the coins.




1.    = \_\_\_\_\_


2.    = \_\_\_\_\_

3.       = \_\_\_\_\_

4.       = \_\_\_\_\_

5.    = \_\_\_\_\_

6.    = \_\_\_\_\_

7.    = \_\_\_\_\_

8.      = \_\_\_\_\_


Name: \_\_\_\_\_

Class: \_\_\_\_\_

## Money


Add the coins.

1.  = 0.56€ \_\_\_\_\_

2.  = 0.53€ \_\_\_\_\_

3.  = 3.65€ \_\_\_\_\_

4.  = 4.59€ \_\_\_\_\_

5.  = 1.22€ \_\_\_\_\_

6.  = 2.55€ \_\_\_\_\_

7.  = 2.52€ \_\_\_\_\_

8.  = 5.12€ \_\_\_\_\_