

Name: _____

Class: _____

Money

Add the coins.

1.      = _____

2.       = _____





3.      = _____

4.       = _____

5.       = _____

6.       = _____

7.       = _____

8.     = _____

Name: _____

Class: _____

Money

Add the coins.

1.  = 0.25€

2.  = 7.00€


3.  = 3.62€

4.  = 3.67€

5.  = 1.07€

6.  = 3.00€

7.  = 4.71€

8.  = 3.11€