


Name: \_\_\_\_\_

Class: \_\_\_\_\_

# Time

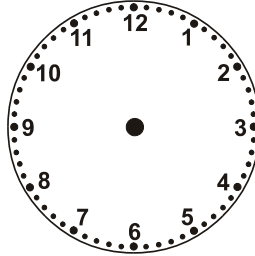
Show the time for each clock.

1.



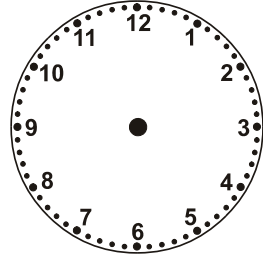
12:30

2.




5:00

3.




10:30

4.




6:30

5.




4:00

6.



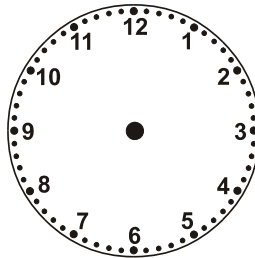
5:30

7.



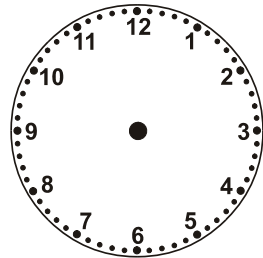
3:30

8.




10:00

9.




6:00

10.



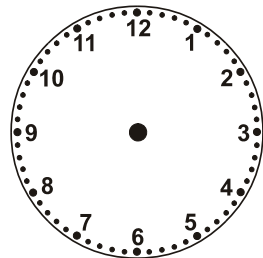
8:00

11.



2:00

12.









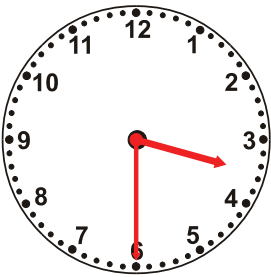





11:30

Name: \_\_\_\_\_

Class: \_\_\_\_\_

# Time

Show the time for each clock.

1.		2.		3.	
	<input type="text" value="12:30"/>		<input type="text" value="5:00"/>		<input type="text" value="10:30"/>
4.		5.		6.	
	<input type="text" value="6:30"/>		<input type="text" value="4:00"/>		<input type="text" value="5:30"/>
7.		8.		9.	
	<input type="text" value="3:30"/>		<input type="text" value="10:00"/>		<input type="text" value="6:00"/>
10.		11.		12.	
	<input type="text" value="8:00"/>		<input type="text" value="2:00"/>		<input type="text" value="11:30"/>