


Name: \_\_\_\_\_

Class: \_\_\_\_\_


# Time

Show the time for each clock.


1.





2.





3.





4.





5.





6.





7.





8.





9.





10.




11.




12.















Name: \_\_\_\_\_

Class: \_\_\_\_\_

# Time

Show the time for each clock.

1. 	2. 	3. 
<input type="text" value="10:30"/>	<input type="text" value="12:00"/>	<input type="text" value="7:30"/>
4. 	5. 	6. 
<input type="text" value="9:00"/>	<input type="text" value="9:30"/>	<input type="text" value="8:30"/>
7. 	8. 	9. 
<input type="text" value="3:30"/>	<input type="text" value="4:30"/>	<input type="text" value="5:00"/>
10. 	11. 	12. 
<input type="text" value="12:30"/>	<input type="text" value="11:30"/>	<input type="text" value="7:00"/>