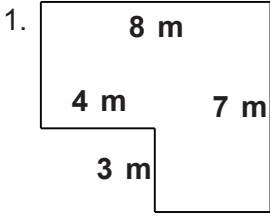


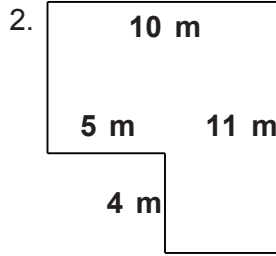
Name: _____

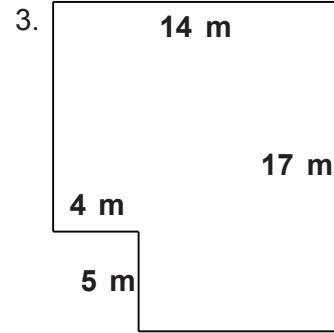
Class: _____

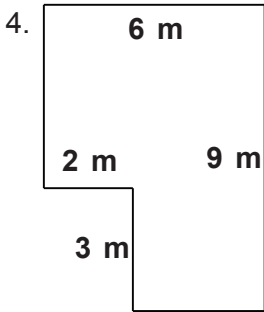
Complex shapes

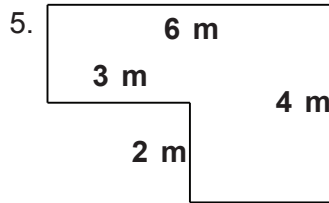
Find the perimeter and area.

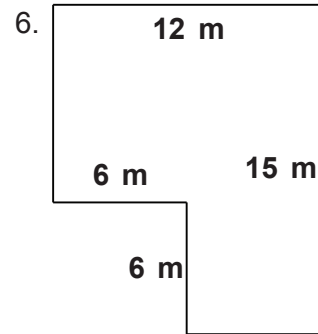


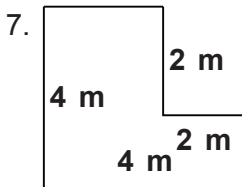


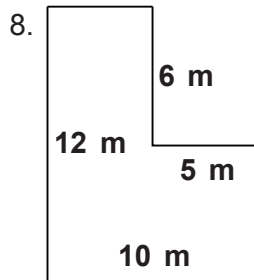


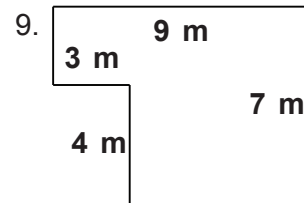










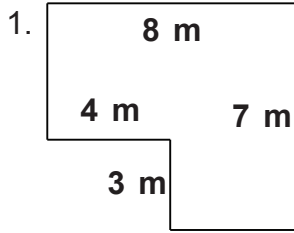


Name: _____

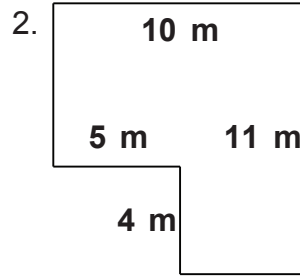
Class: _____

Complex shapes

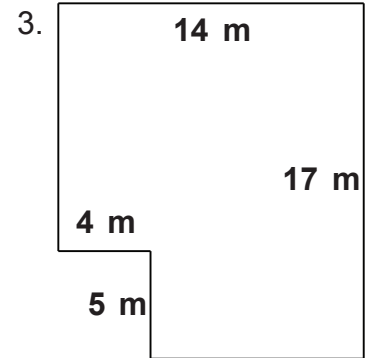
Find the perimeter and area.



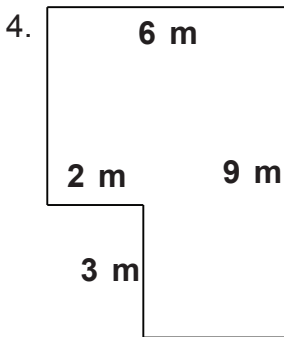
$P = 30 \text{ m}$ $A = 44 \text{ m}^2$



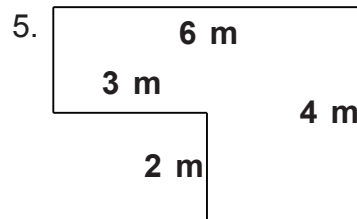
$P = 42 \text{ m}$ $A = 90 \text{ m}^2$



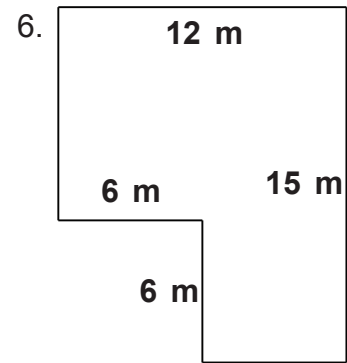
$P = 62 \text{ m}$ $A = 218 \text{ m}^2$



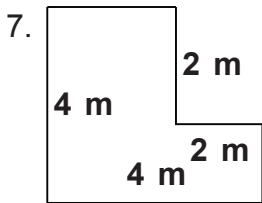
$P = 30 \text{ m}$ $A = 48 \text{ m}^2$



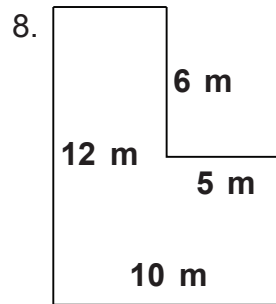
$P = 20 \text{ m}$ $A = 18 \text{ m}^2$



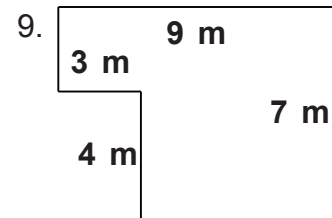
$P = 54 \text{ m}$ $A = 144 \text{ m}^2$



$P = 16 \text{ m}$ $A = 12 \text{ m}^2$



$P = 44 \text{ m}$ $A = 90 \text{ m}^2$



$P = 32 \text{ m}$ $A = 51 \text{ m}^2$