


Name: \_\_\_\_\_

Class: \_\_\_\_\_

## Measurements

Measure the rectangles and calculate the area of each.

1.




2.




3.



4.



5.



6.



7.



Name: \_\_\_\_\_

Class: \_\_\_\_\_

# Measurements

Measure the rectangles and calculate the area of each.

