



Name: \_\_\_\_\_


Class: \_\_\_\_\_


# Time


Show the time for each clock.


1.    
 \_\_\_\_\_


2.    
 \_\_\_\_\_


3.    
 \_\_\_\_\_


4.    
 \_\_\_\_\_


5.    
 \_\_\_\_\_


6.    
 \_\_\_\_\_


7.    
 \_\_\_\_\_

8.    
 \_\_\_\_\_

9.    
 \_\_\_\_\_

10.    
 \_\_\_\_\_

11.    
 \_\_\_\_\_

12.    
 \_\_\_\_\_


Name: \_\_\_\_\_

Class: \_\_\_\_\_

# Time


Show the time for each clock.

1.




22:37

2.




11:53

3.




15:40

4.




04:46

5.




00:10

6.




17:34

7.




15:07

8.




06:26

9.




09:29

10.




23:48

11.



12:45

12.



01:34