

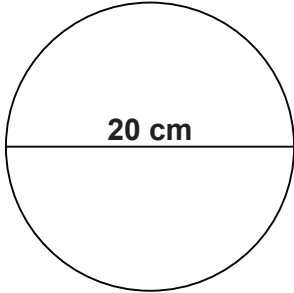
Name: \_\_\_\_\_

Class: \_\_\_\_\_

## Geometry

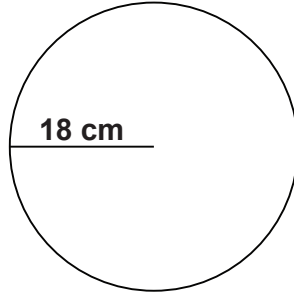
Calculate the circumference and area of each circle. Let  $\pi = 3.14$

1.



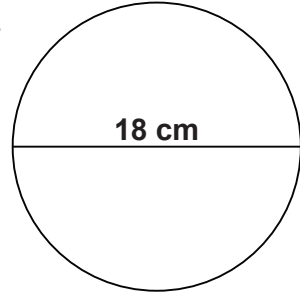
\_\_\_\_\_  
\_\_\_\_\_

2.



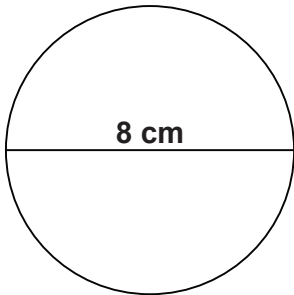
\_\_\_\_\_  
\_\_\_\_\_

3.



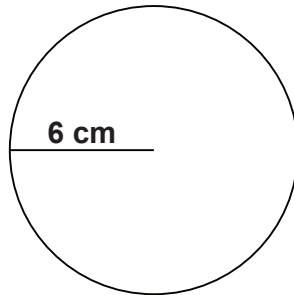
\_\_\_\_\_  
\_\_\_\_\_

4.



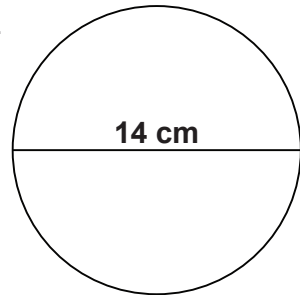
\_\_\_\_\_  
\_\_\_\_\_

5.



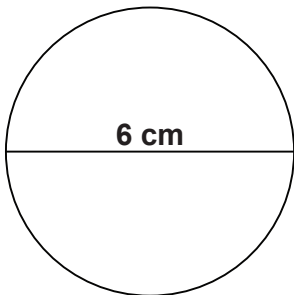
\_\_\_\_\_  
\_\_\_\_\_

6.



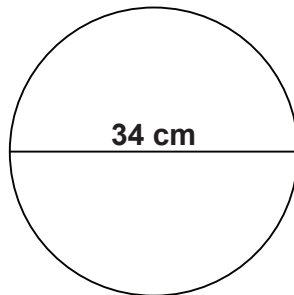
\_\_\_\_\_  
\_\_\_\_\_

7.



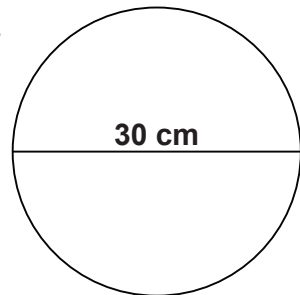
\_\_\_\_\_  
\_\_\_\_\_

8.



\_\_\_\_\_  
\_\_\_\_\_

9.



\_\_\_\_\_  
\_\_\_\_\_

\_\_\_\_\_

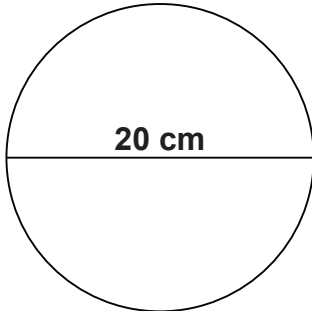
Name: \_\_\_\_\_

Class: \_\_\_\_\_

# Geometry

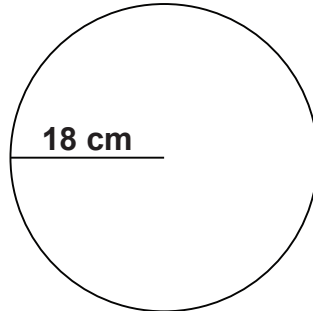
Calculate the circumference and area of each circle. Let  $\pi = 3.14$

1.



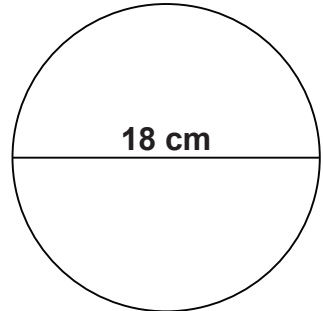
$$\begin{aligned} C &= 62.80 \text{ cm} \\ A &= 314.00 \text{ cm}^2 \end{aligned}$$

2.



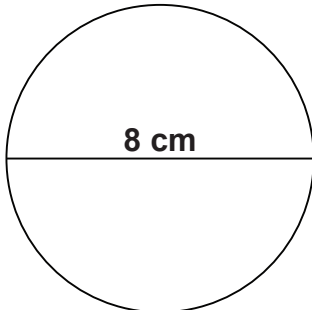
$$\begin{aligned} C &= 113.04 \text{ cm} \\ A &= 1,017.36 \text{ cm}^2 \end{aligned}$$

3.



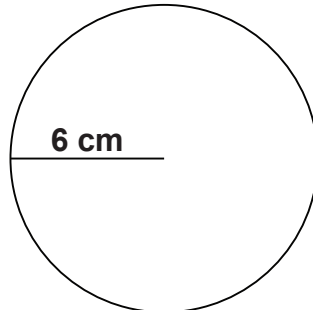
$$\begin{aligned} C &= 56.52 \text{ cm} \\ A &= 254.34 \text{ cm}^2 \end{aligned}$$

4.



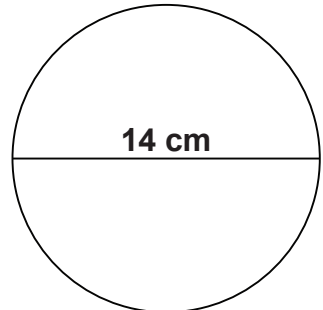
$$\begin{aligned} C &= 25.12 \text{ cm} \\ A &= 50.24 \text{ cm}^2 \end{aligned}$$

5.



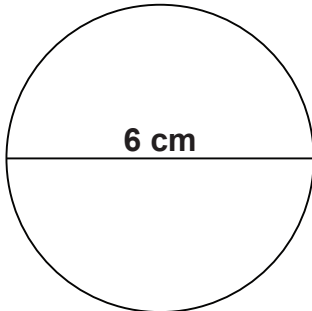
$$\begin{aligned} C &= 37.68 \text{ cm} \\ A &= 113.04 \text{ cm}^2 \end{aligned}$$

6.



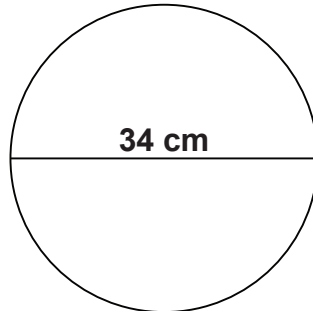
$$\begin{aligned} C &= 43.96 \text{ cm} \\ A &= 153.86 \text{ cm}^2 \end{aligned}$$

7.



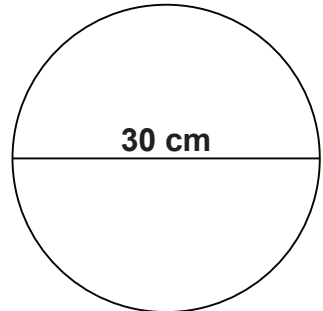
$$\begin{aligned} C &= 18.84 \text{ cm} \\ A &= 28.26 \text{ cm}^2 \end{aligned}$$

8.



$$\begin{aligned} C &= 106.76 \text{ cm} \\ A &= 907.46 \text{ cm}^2 \end{aligned}$$

9.



$$\begin{aligned} C &= 94.20 \text{ cm} \\ A &= 706.50 \text{ cm}^2 \end{aligned}$$