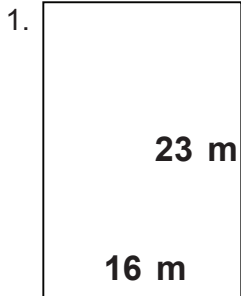


Name: \_\_\_\_\_

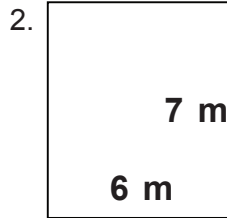
Class: \_\_\_\_\_

## Rectangles

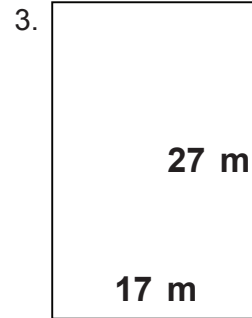
Find the perimeter and area.



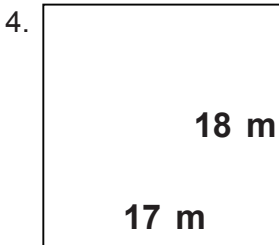
\_\_\_\_\_



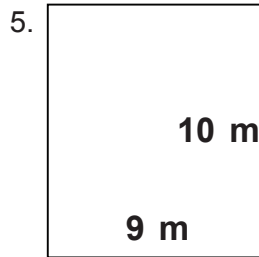
\_\_\_\_\_



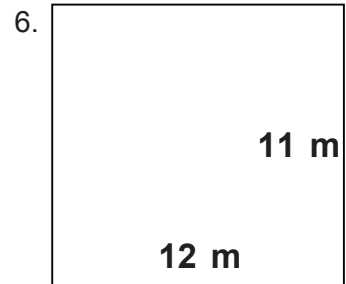
\_\_\_\_\_



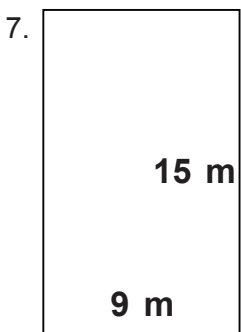
\_\_\_\_\_



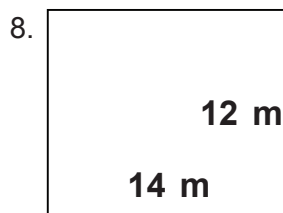
\_\_\_\_\_



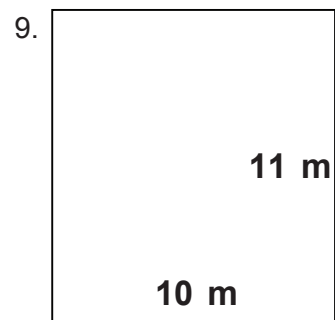
\_\_\_\_\_



\_\_\_\_\_



\_\_\_\_\_



\_\_\_\_\_

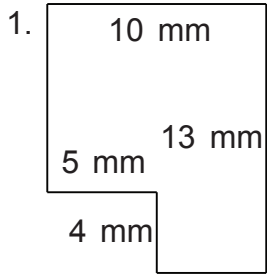
\_\_\_\_\_

Name: \_\_\_\_\_

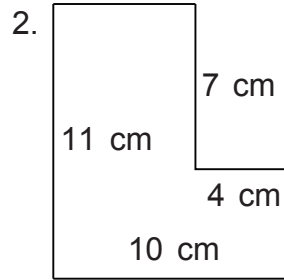
Class: \_\_\_\_\_

# Geometry

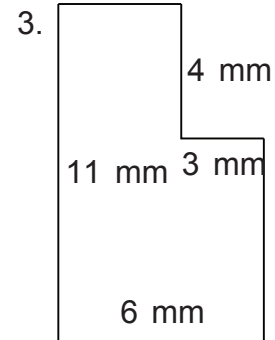
Find the perimeter and area.



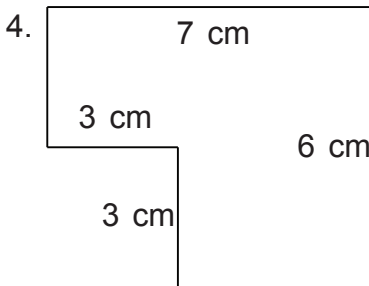
$P = 46 \text{ mm}$   $A = 110 \text{ mm}^2$



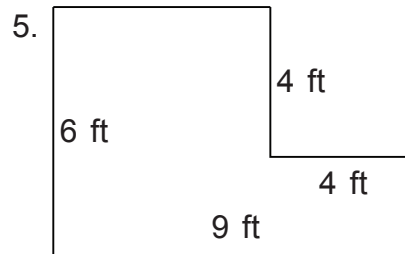
$P = 42 \text{ cm}$   $A = 82 \text{ cm}^2$



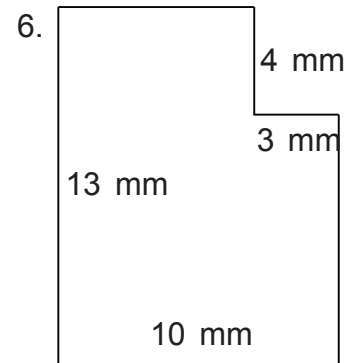
$P = 34 \text{ mm}$   $A = 54 \text{ mm}^2$



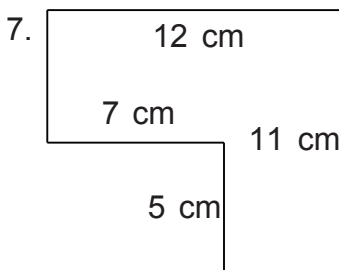
$P = 26 \text{ cm}$   $A = 33 \text{ cm}^2$



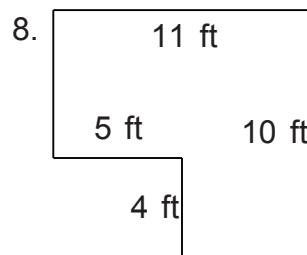
$P = 30 \text{ ft}$   $A = 38 \text{ ft}^2$



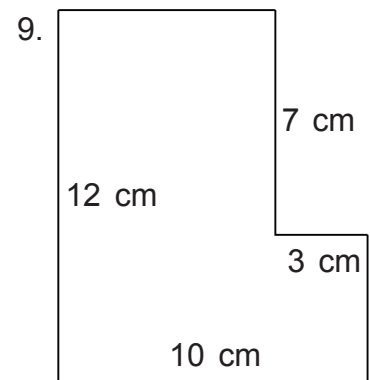
$P = 46 \text{ mm}$   $A = 118 \text{ mm}^2$



$P = 46 \text{ cm}$   $A = 97 \text{ cm}^2$



$P = 42 \text{ ft}$   $A = 90 \text{ ft}^2$



$P = 44 \text{ cm}$   $A = 99 \text{ cm}^2$