

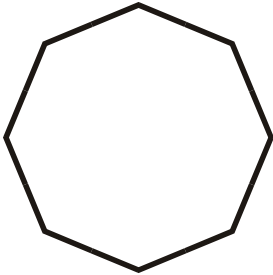
Name: \_\_\_\_\_

Class: \_\_\_\_\_

# Polygons


Identify the polygons.

1.




\_\_\_\_\_

2.



\_\_\_\_\_

3.



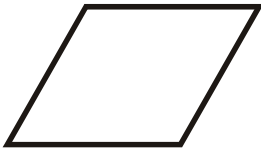
\_\_\_\_\_

4.



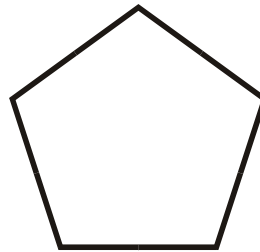
\_\_\_\_\_

5.



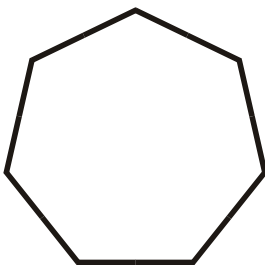
\_\_\_\_\_

6.



\_\_\_\_\_

7.



\_\_\_\_\_

8.



\_\_\_\_\_

\_\_\_\_\_

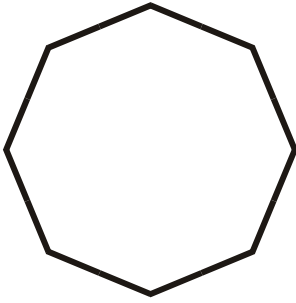
Name: \_\_\_\_\_

Class: \_\_\_\_\_

# Polygons


Identify the polygons.

1.




Regular Octagon  $S=8$   $V=8$

2.



Isosceles Triangle  $S=3$   $V=3$

3.



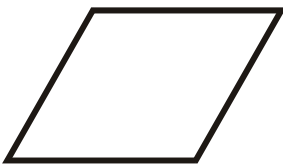
Square  $S=4$   $V=4$

4.



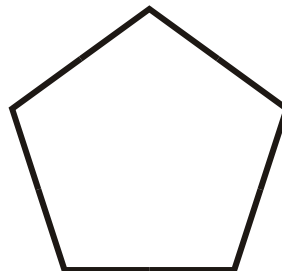
Scalene Triangle  $S=3$   $V=3$

5.



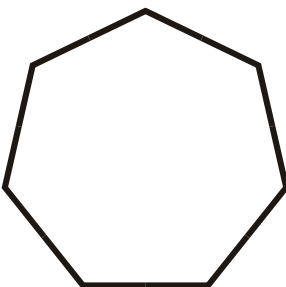
Rhombus  $S=4$   $V=4$

6.



Regular Pentagon  $S=5$   $V=5$

7.



Regular Heptagon  $S=7$   $V=7$

8.



Parallelogram  $S=4$   $V=4$