

Name: _____

Class: _____


Polygons

Identify the polygons.

1.



2.



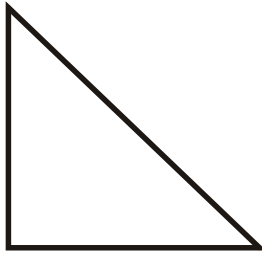
3.




4.



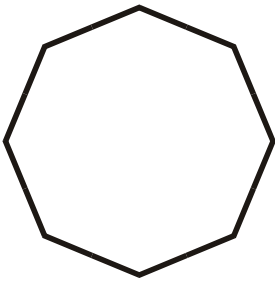
5.



6.



7.




8.



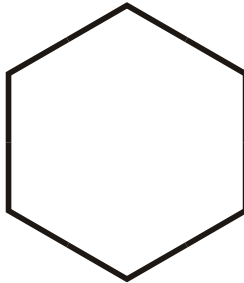
9.



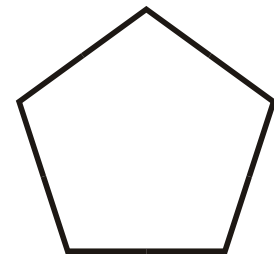
10.



11.



12.



Name: _____

Class: _____

Polygons


Identify the polygons.

1.



Scalene Triangle

2.



Square

3.



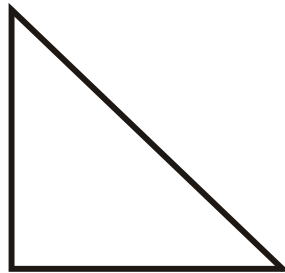
Rhombus

4.



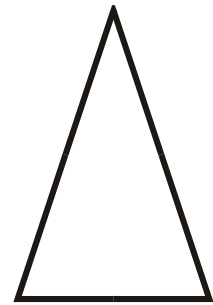
Rectangle

5.



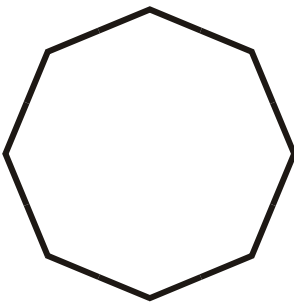
Right Triangle

6.



Isosceles Triangle

7.



Regular Octagon

8.



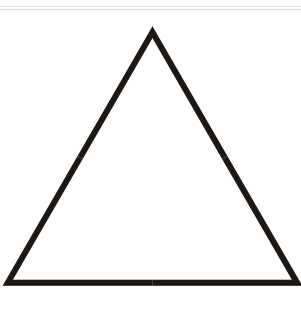
Trapezoid

9.



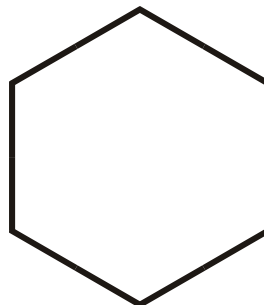
Parallelogram

10.



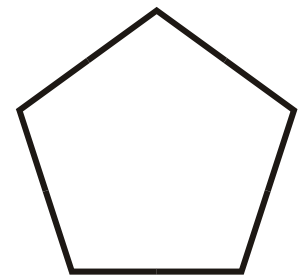
Equilateral Triangle

11.



Regular Hexagon

12.



Regular Pentagon