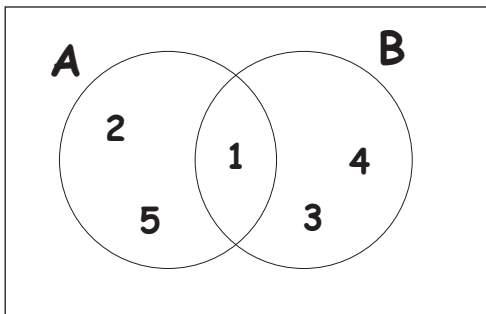


Name : ..... Class : .....

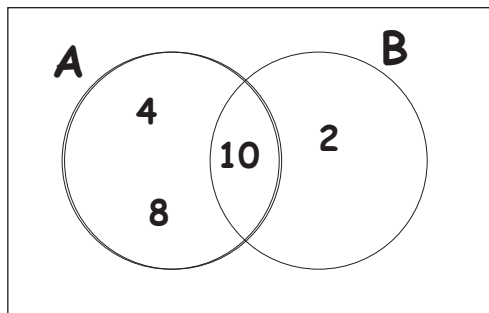
## Venn diagrams

1.



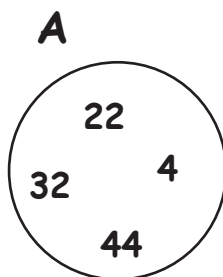
What is  $A \cap B$  ?

2.



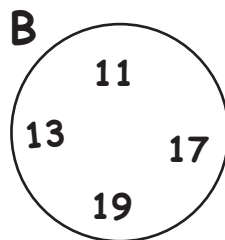
What is  $A \cup B$  ?

3.



What elements are in the set A ?

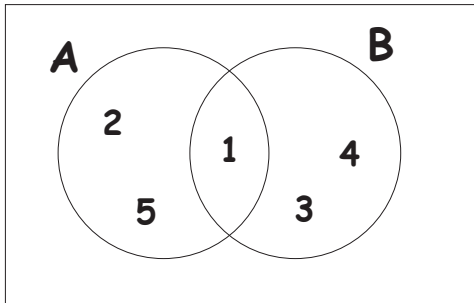
4.



What elements are in the set B ?

## Answers

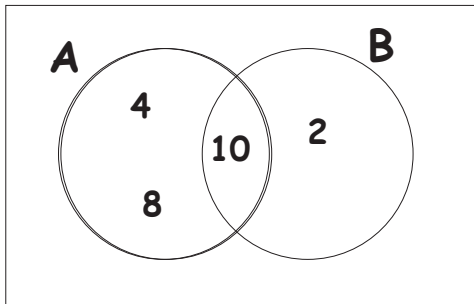
1.



What is  $A \cap B$  ?

**{1}**

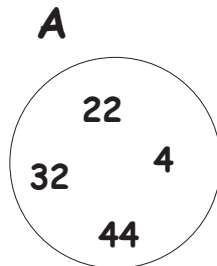
2.



What is  $A \cup B$  ?

**{2, 4, 6, 8}**

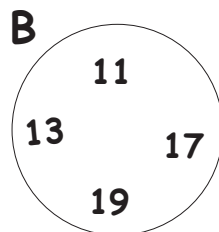
3.



What elements are in the set A ?

**{4, 22, 32, 44}**

4.



What elements are in the set B ?

**{11, 13, 17, 19}**