

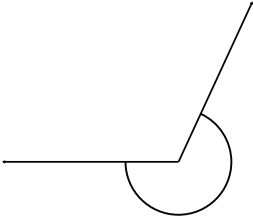
Name: _____

Class: _____

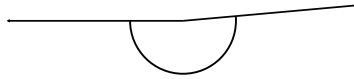
Geometry

Classify and measure the angles.

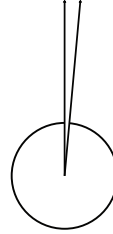
1.



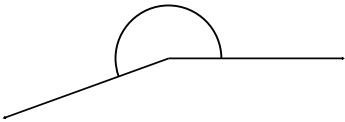
2.



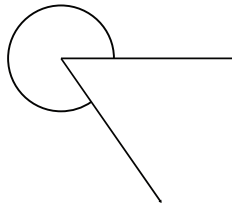
3.



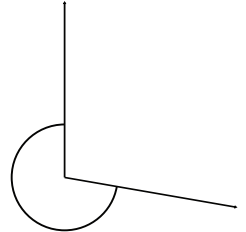
4.



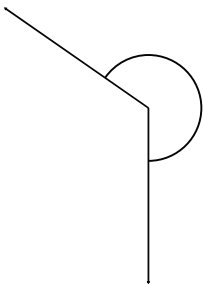
5.



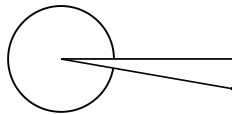
6.



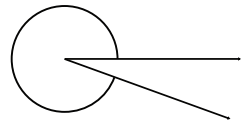
7.



8.



9.



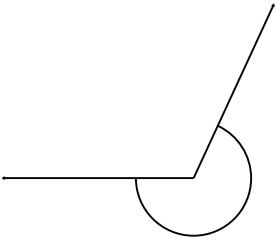
Name: _____

Class: _____

Geometry

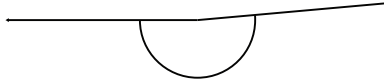
Classify and measure the angles.

1.



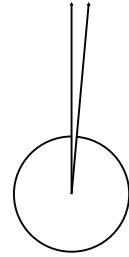
245° Reflex

2.



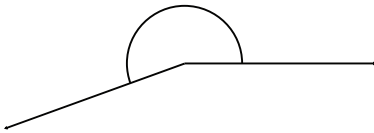
185° Reflex

3.



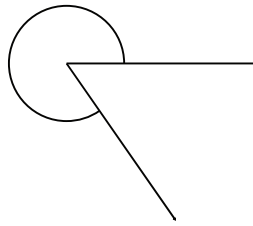
355° Reflex

4.



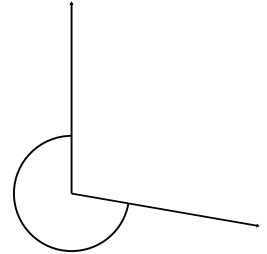
200° Reflex

5.



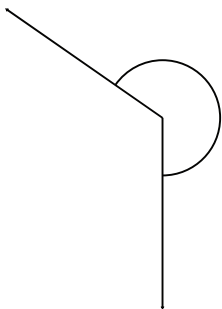
305° Reflex

6.



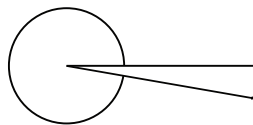
260° Reflex

7.



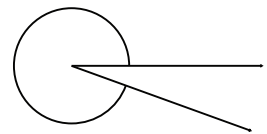
235° Reflex

8.



350° Reflex

9.



340° Reflex