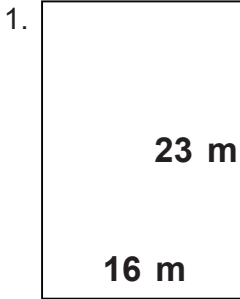


Name: \_\_\_\_\_

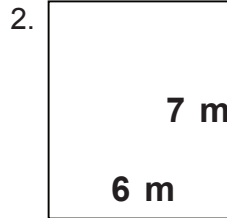
Class: \_\_\_\_\_

## Rectangles

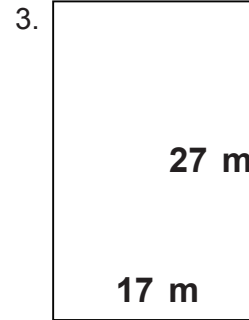
Find the perimeter and area.



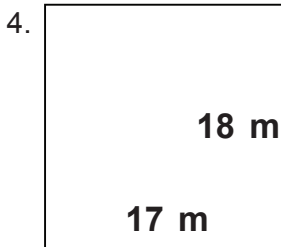
\_\_\_\_\_



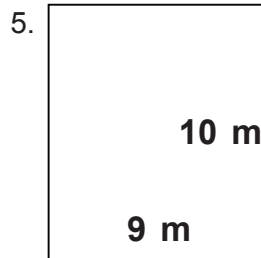
\_\_\_\_\_



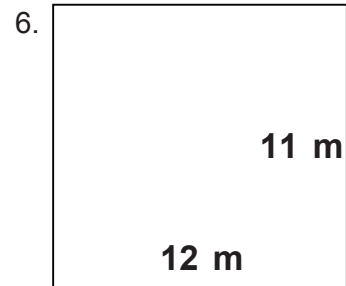
\_\_\_\_\_



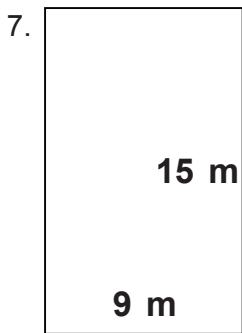
\_\_\_\_\_



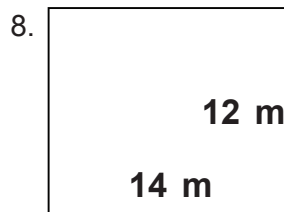
\_\_\_\_\_



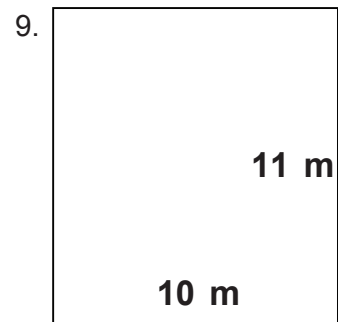
\_\_\_\_\_



\_\_\_\_\_



\_\_\_\_\_



\_\_\_\_\_

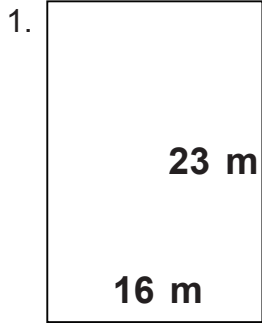
\_\_\_\_\_

Name: \_\_\_\_\_

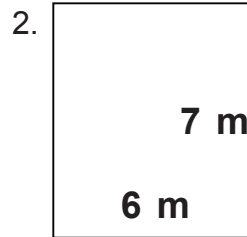
Class: \_\_\_\_\_

## Rectangles

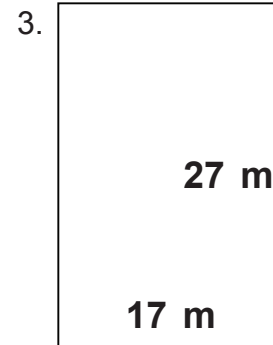
Find the perimeter and area.



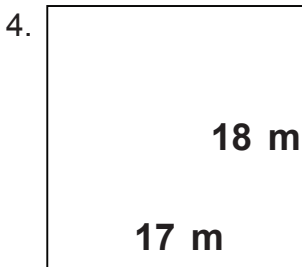
$P = 78 \text{ m}$   $A = 368 \text{ m}^2$



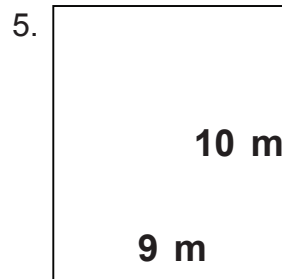
$P = 26 \text{ m}$   $A = 42 \text{ m}^2$



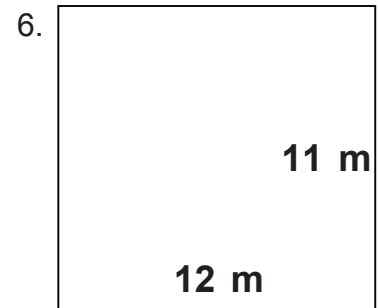
$P = 88 \text{ m}$   $A = 459 \text{ m}^2$



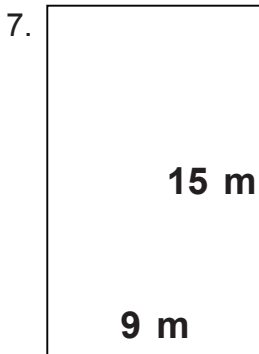
$P = 70 \text{ m}$   $A = 306 \text{ m}^2$



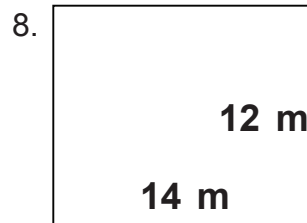
$P = 38 \text{ m}$   $A = 90 \text{ m}^2$



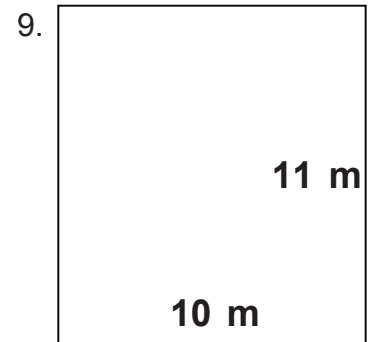
$P = 46 \text{ m}$   $A = 132 \text{ m}^2$



$P = 48 \text{ m}$   $A = 135 \text{ m}^2$



$P = 52 \text{ m}$   $A = 168 \text{ m}^2$



$P = 42 \text{ m}$   $A = 110 \text{ m}^2$