

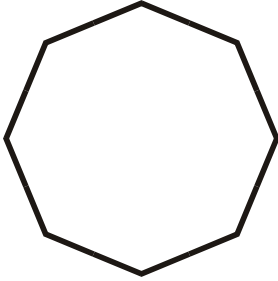
Name: _____

Class: _____


Polygons

Identify the polygons.


1.



2.



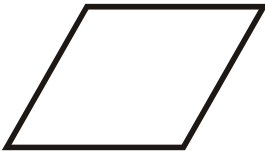
3.



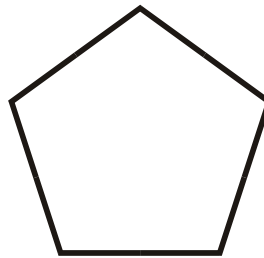
4.



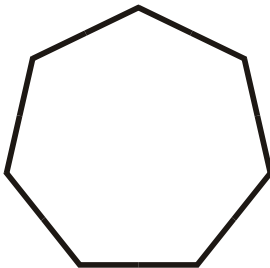
5.



6.



7.



8.



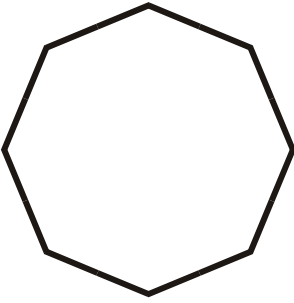
Name: _____

Class: _____

Polygons


Identify the polygons.

1.




Regular Octagon $S=8$ $V=8$

2.



Isosceles Triangle $S=3$ $V=3$

3.



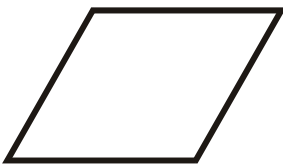
Square $S=4$ $V=4$

4.



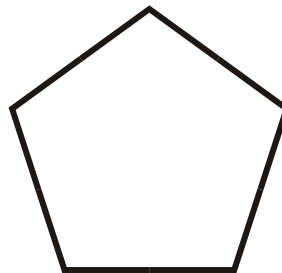
Scalene Triangle $S=3$ $V=3$

5.



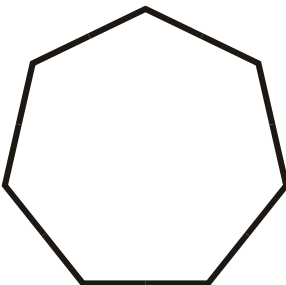
Rhombus $S=4$ $V=4$

6.



Regular Pentagon $S=5$ $V=5$

7.



Regular Heptagon $S=7$ $V=7$

8.



Parallelogram $S=4$ $V=4$