


Name: \_\_\_\_\_

Class: \_\_\_\_\_

# Time


Draw the clock hands to show the passage of time.

1.



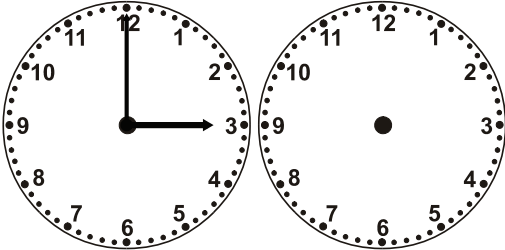
What time will it be in 1 hour 0 minutes?

2.




What time was it 1 hour 30 minutes ago?

3.




What time was it 3 hours 30 minutes ago?

4.




What time was it 5 hours 0 minutes ago?

5.




What time was it 4 hours 0 minutes ago?

6.




What time was it 3 hours 0 minutes ago?

7.



What time will it be in 4 hours 0 minutes?

8.



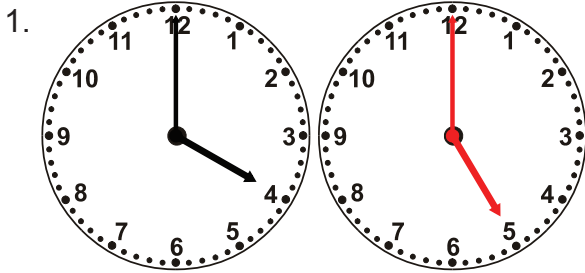
What time was it 5 hours 0 minutes ago?

Name: \_\_\_\_\_

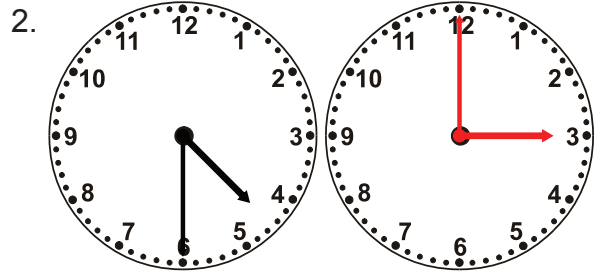
Class: \_\_\_\_\_

# Time

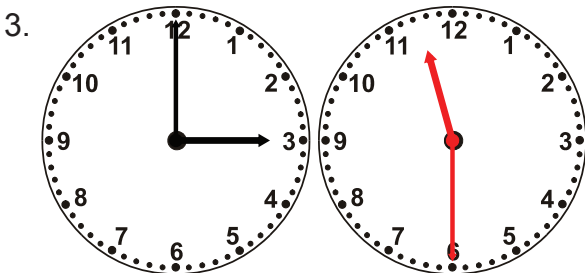
Draw the clock hands to show the passage of time.



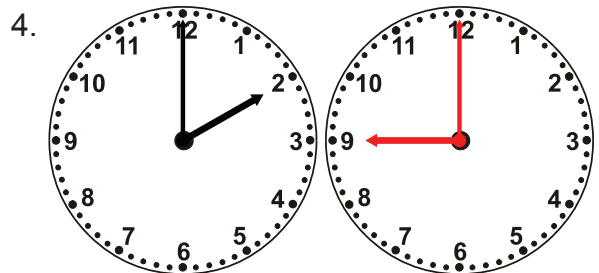
What time will it be in 1 hour 0 minutes?



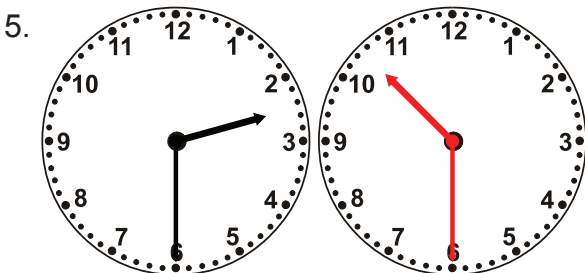
What time was it 1 hour 30 minutes ago?




What time was it 3 hours 30 minutes ago?



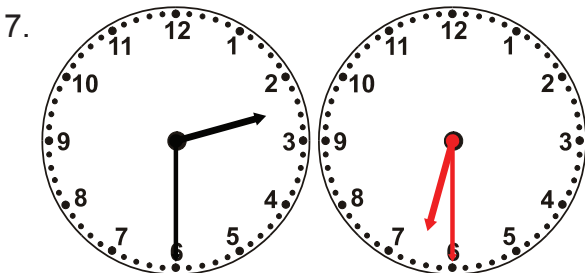
What time was it 5 hours 0 minutes ago?



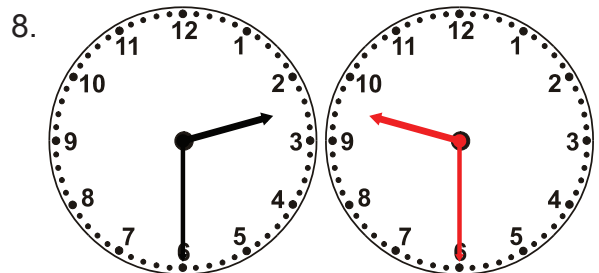
What time was it 4 hours 0 minutes ago?



What time was it 3 hours 0 minutes ago?



What time will it be in 4 hours 0 minutes?



What time was it 5 hours 0 minutes ago?