

GRAPHING LINEAR EQUATIONS

Name: _____

Class: _____

Fill the table with coordinates and draw graphs for each equation

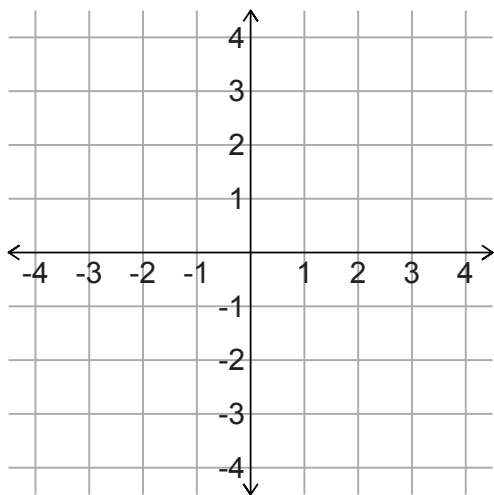
1) $Y = X + 1$

X	Y

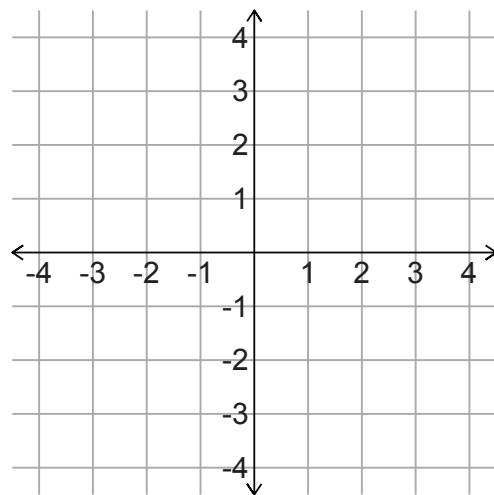
2) $Y = 2x + -2$

X	Y

1.



2.



Name: _____

Class: _____

Fill the table with coordinates and draw graphs for each equation

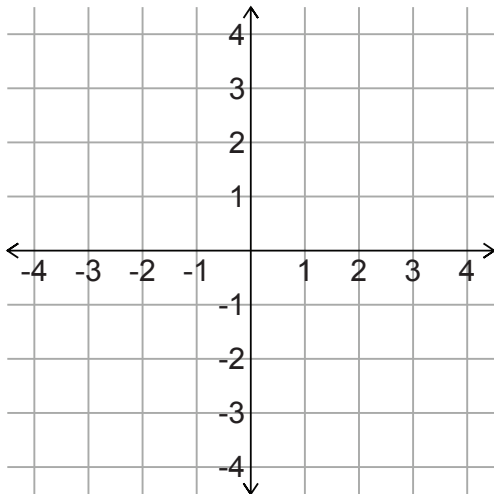
1) $Y = X + 1$

X	Y
-2	-1
-1	0
0	1
1	2

2) $Y = 2x + -2$

X	Y
-2	-6
-1	-4
0	-2
1	0

1.



2.

