

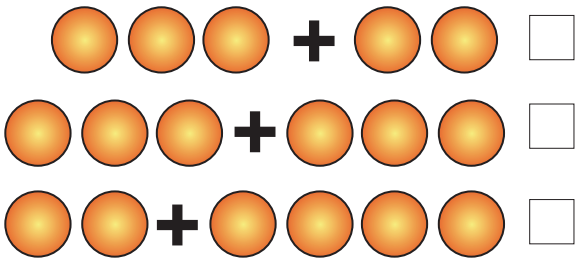
Name : _____ Class : _____

Subtraction

Solve the problem and tick the picture that represents it

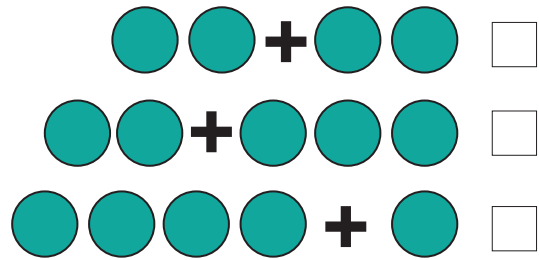
1.

$$3 + 3 =$$



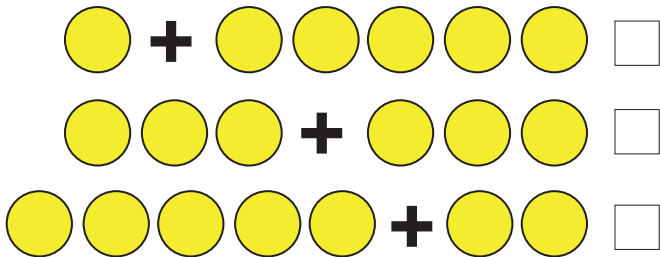
2.

$$4 + 1 =$$



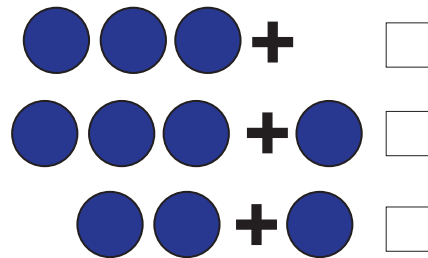
3.

$$5 + 2 =$$



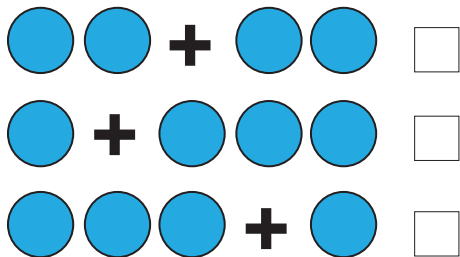
4.

$$3 + 0 =$$



5.

$$2 + 2 =$$



6.

$$6 + 1 =$$

