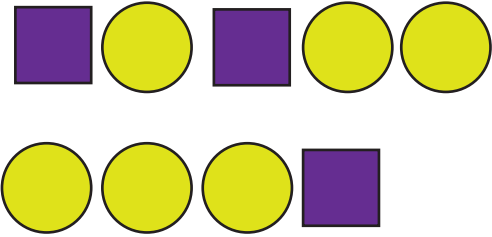
















Name : _____ Class : _____

Comparing

Tick the right choice

<p>1.</p> 	<p>Which picture shows more ?</p> <p><input type="checkbox"/> </p> <p><input type="checkbox"/> </p>
<p>2.</p> 	<p>Which picture shows less ?</p> <p><input type="checkbox"/> </p> <p><input type="checkbox"/> </p>
<p>3.</p> 	<p>Which picture shows more ?</p> <p><input type="checkbox"/> </p> <p><input type="checkbox"/> </p>
<p>4.</p> 	<p>Which picture shows less ?</p> <p><input type="checkbox"/> </p> <p><input type="checkbox"/> </p>
<p>5.</p> 	<p>Which picture shows more ?</p> <p><input type="checkbox"/> </p> <p><input type="checkbox"/> </p>