











Name : _____ Class : _____

Comparing

Tick the correct answer

<p>(A)  <input type="checkbox"/></p>	<p>Which picture shows more ?</p>
<p>(B)  <input type="checkbox"/></p>	
<p>(A)  <input type="checkbox"/></p>	<p>Which picture shows less ?</p>
<p>(B)  <input type="checkbox"/></p>	
<p>(A)  <input type="checkbox"/></p>	<p>Which picture shows more ?</p>
<p>(B)  <input type="checkbox"/></p>	
<p>(A)  <input type="checkbox"/></p>	<p>Which picture shows less ?</p>
<p>(B)  <input type="checkbox"/></p>	
<p>(A)  <input type="checkbox"/></p>	<p>Which picture shows more ?</p>
<p>(B)  <input type="checkbox"/></p>	